

ATIVIDADE DE MATEMÁTICA

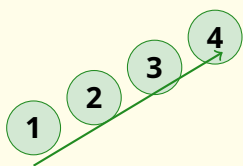
ESCOLA: _____
NOME: _____ DATA: __/__/____
TURMA: 2º ANO PROFESSOR(A): _____

Ordem Crescente e Decrescente

VAMOS APRENDER?

ORDEM CRESCENTE

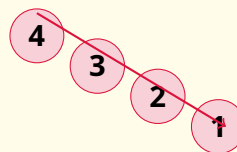
(Do menor para o maior)



"É como **subir** uma escada!"

ORDEM DECRESCENTE

(Do maior para o menor)



"É como **descer** uma escada!"

1. Subindo a Montanha (Ordem Crescente ↗)

Ajude o alpinista a organizar os números do **MENOR** para o **MAIOR**.

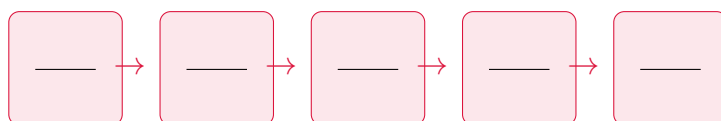
Números bagunçados: **15** **8** **32** **20** **4**



2. Descendo a Ladeira (Ordem Decrescente ↘)








Agora organize os números do **MAIOR** para o **MENOR**.








Números bagunçados: **50** **99** **10** **45** **72**



3. Complete as Lagartas

Descubra o segredo e complete os números que faltam nos corpos das lagartas.

a) Crescente (De 1 em 1):       

b) Decrescente (De 10 em 10):       

4. Quem é o Maior?

Pinte de **VERDE** o número **MAIOR** e de **VERMELHO** o número **MENOR** em cada par.

28

82

45

40