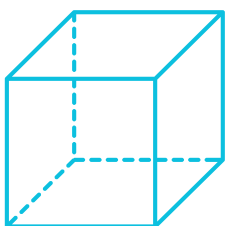
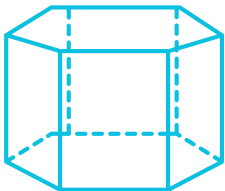
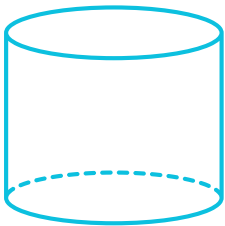
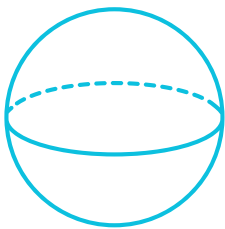
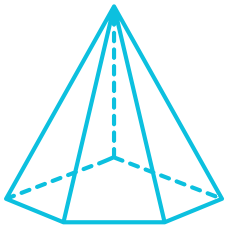
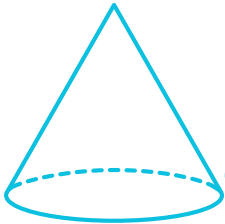


Prismas y pirâmides

Desenhe uma linha para conectar o nome à forma geométrica correspondente.



Prisma hexagonal

CONE

CILINDRO

PIRÂMIDE PENTAGONAL

CUBO

ESFERA

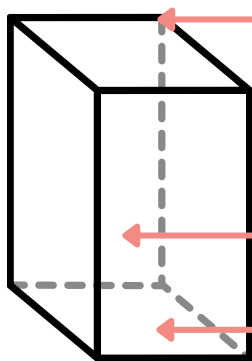
Coloque a palavra onde corresponda segundo as partes das figuras.

Face

Vértice

Base

Aresta



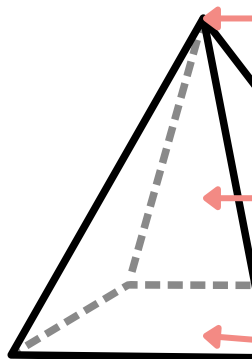
Face

Vértice

Base

Ápice

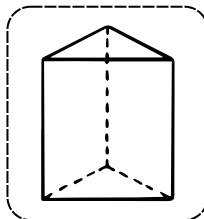
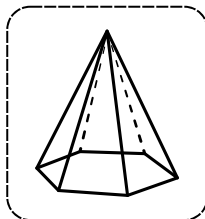
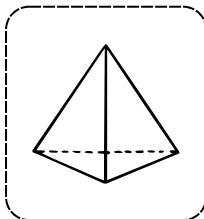
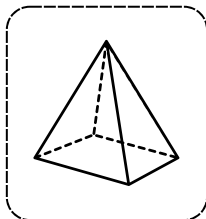
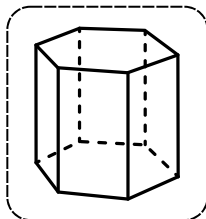
Aresta



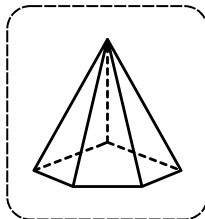
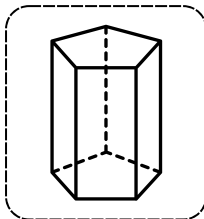
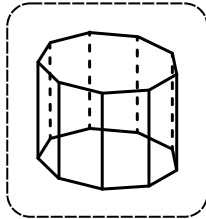
Instruções: Recorte, cole e classifique os seguintes sólidos geométricos.
Além disso, escreva seu nome correto.

Prismas

Pirâmides



Pirâmide quadrangular



Pirâmide hexagonal

Prisma nonagonal

Pirâmide pentagonal

Pirâmide triangular

Prisma hexagonal

Prisma triangular

Prisma pentagonal

Mais recursos
EDUCATIVOS EM

educlub